
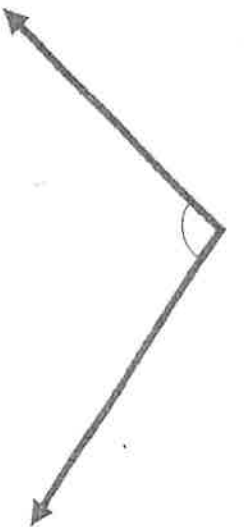



## Measuring Angles

Find the measure of these angles.



## Drawing Angles

Draw a 85 degree angle.

Draw a 47 degree angle.

Draw a 114 degree angle.

Draw one acute angle and one obtuse angle. What are the measures of your angles?

# Measuring and Drawing Angles