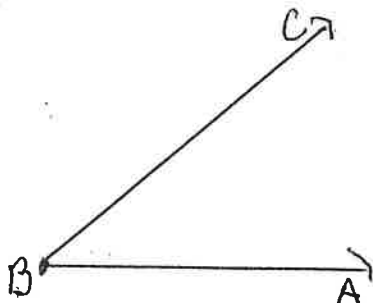
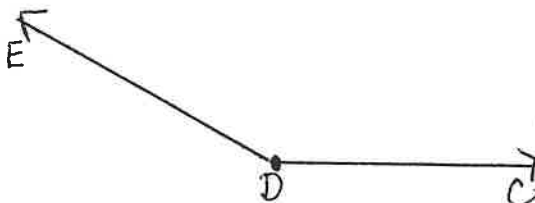


Find the measure for each angle.

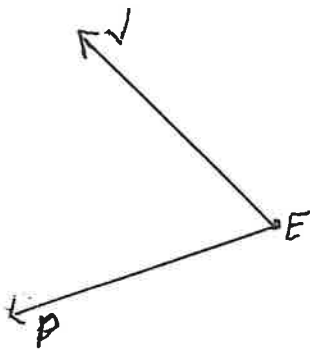
#1 $m\angle ABC =$ _____



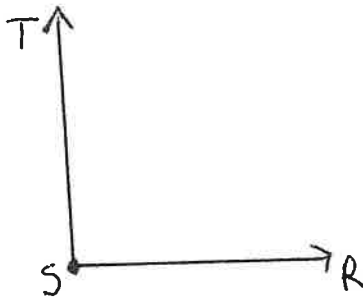
#2 $m\angle CDE =$ _____



#3 $m\angle VEP =$ _____



#4 $m\angle RST =$ _____



#5 $m\angle XYZ =$ _____

