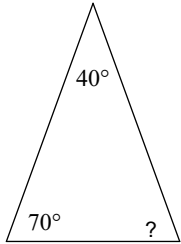


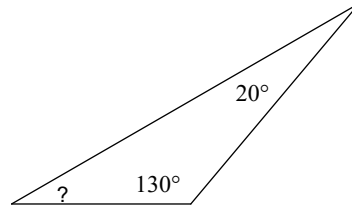
Simple Triangle Equations

Write and solve an equation for the missing angle. Show your work!!!

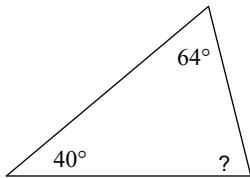
1)



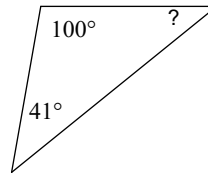
2)



3)



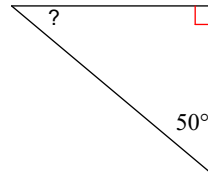
4)



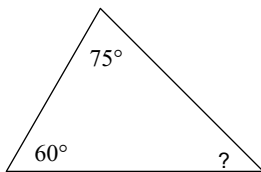
5)



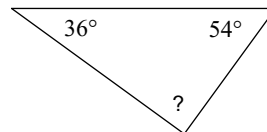
6)



7)



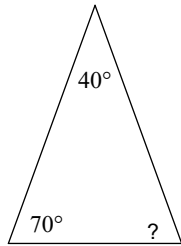
8)



Simple Triangle Equations

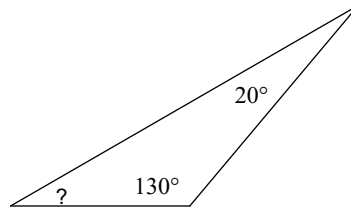
Write and solve an equation for the missing angle. Show your work!!!

1)



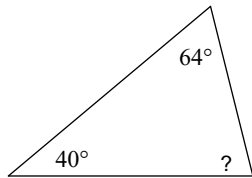
70°

2)



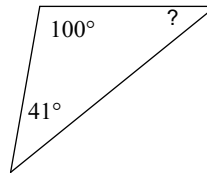
30°

3)



76°

4)



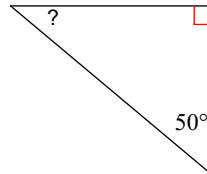
39°

5)



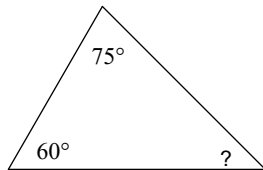
32°

6)



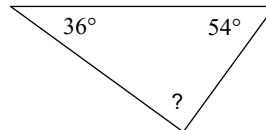
40°

7)



45°

8)



90°