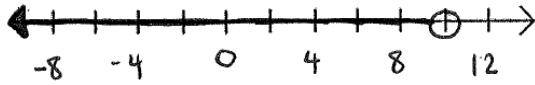
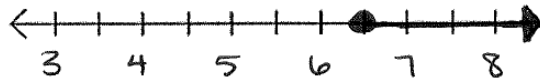


****must show all steps****


1. $x < 10$



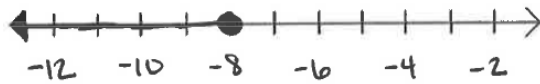
2. $x \geq 6.5$ OR $6.5 \leq x$



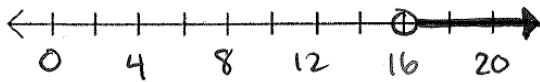
3. $x > -2\frac{2}{3}$



4. $x \leq -8$



5. $x > 16$



6. $x \geq -4$ OR $-4 \leq x$

